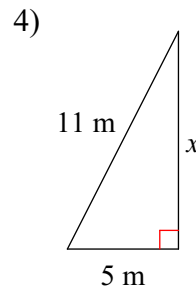
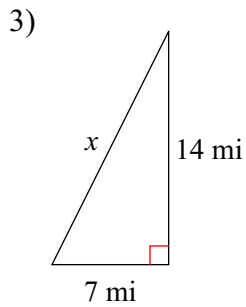
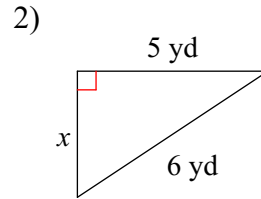
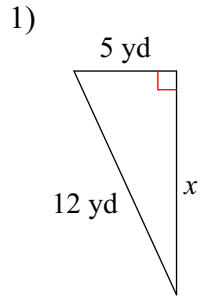


Pythagorean Theorem + Trig

Find the missing side of each triangle. Leave your answers in simplest radical form.



Find the value of each trigonometric ratio.

